










Ahoj,

úkol pro Pavlínu, Jitku a Denise.

Vypracovaný úkol zašli na adresu:

leos.palicka@specialnihk.cz.


SPOČÍTEJ A ZAPIŠ

MATEMATIKA

1. VYZNAĚ NA ĚISELNĚ OSE:


$4 + 3 = \underline{\quad}$




$2 + 7 = \underline{\quad}$



$10 - 6 = \underline{\quad}$



$8 - 5 = \underline{\quad}$



2. POROVNEJ:

$7 \square 10$

$5 \square 5$

$2 \square 1$

$6 \square 3$

$0 \square 9$

$8 \square 9$

$9 \square 4$

$0 \square 0$

$7 \square 5$

$3 \square 10$

3. VYPOĚĪTEJ:

$5 + 5 =$

$9 + 1 =$

$9 - 4 =$

$7 - 6 =$

$10 - 5 =$

$10 - 9 =$

$7 - 2 =$

$7 + 3 =$

$2 + 7 =$

$6 + 2 =$

$4 + 1 =$

$0 + 7 =$

$3 + 6 =$

$10 + 0 =$

$9 - 2 =$

$6 + 4 =$

4. OPRAV:

$1 + 7 = 8$

$10 - 8 = 3$

$9 - 6 = 4$

$2 + 7 = 9$

$9 - 8 = 0$

$1 + 1 = 2 \checkmark$

$3 - 1 = 1 \times 2$

5. URĚI POĚET GEOM. ŪTVARŮ:

