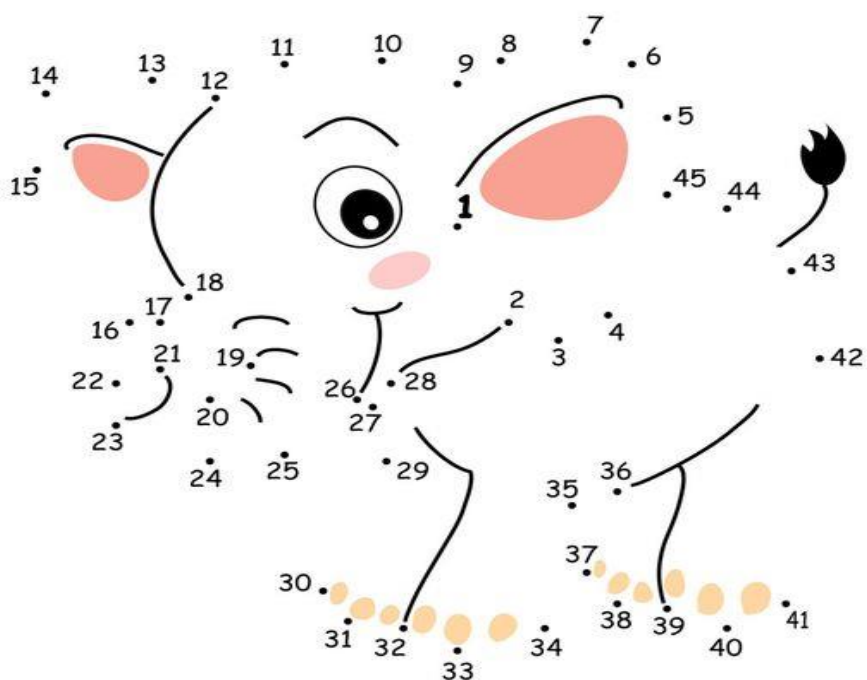


# OPAKOVÁNÍ POČTY DO 100

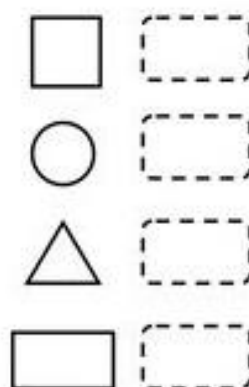

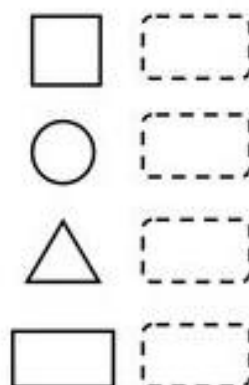

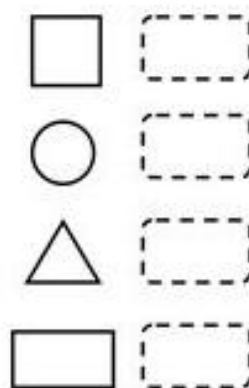
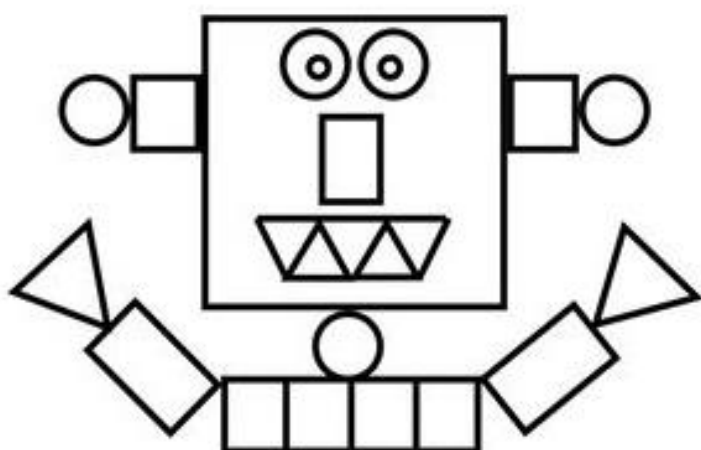
## 1. Dopln číselnou řadu do 100

1			4				8		
		13				17			20
21					26				30
	32		34					39	
	42	43				47			
51				55	56			59	
		63		65			68		70
		73				77			80
	82				86			89	
91				95			98		


## 2. Spoj čísla od čísla 1 do 45. Obrázek vybarvi.



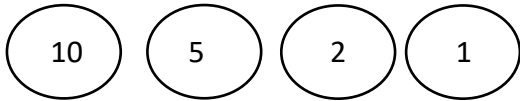
3. Spočítej geometrické tvary, výsledek napiš do rámečku vedle obrázku. Obrázky můžeš



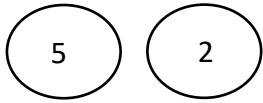
4. Najdi faraónův poklad. Začni počítáním malých pyramid dole a pracuj se až k poslední pyramidě nahoře, která ukryvá poklad faraóna. Číslo nahoře je vždy součtem dvou čísel pod ním.



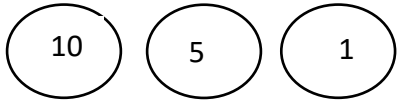
5. Kolik peněz máš v peněžence?



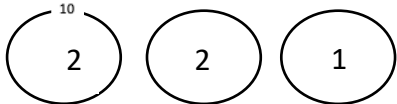
\_\_\_\_\_



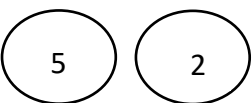
\_\_\_\_\_



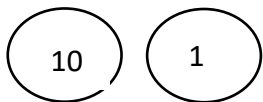
\_\_\_\_\_



\_\_\_\_\_




\_\_\_\_\_



\_\_\_\_\_

10



6. Spoj věci se správnou částkou v mincích.



12,- ●



8,- ●



7,- ●

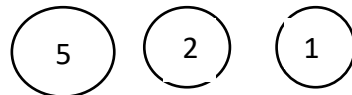


14,- ●

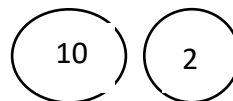


5,- ●

●

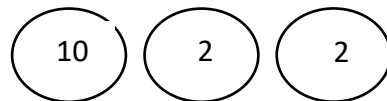


●



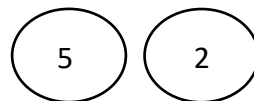
10

●



10

●



●

